




Today you will be completing an Arithmetic test. Try to improve on the mark you achieved yesterday. You should try to complete this test in 30 minutes. The answers are on the last page for you to self-assess your work.

Year 4

Mathematics

Arithmetic: Test 5

Name	
Date	




24

total marks



4

$482 - 50 =$




1 mark



5

$88 \times 6 =$




1 mark



6

$76 \div 4 =$



1 mark



Total for this page



7

$$\frac{4}{15} + \frac{7}{15} =$$



1 mark

8

$$\frac{3}{4} - \frac{1}{4} =$$



1 mark

9

$$4767 + 1000 =$$



1 mark

Total for
this page

19

$6.03 + 0.07 =$

A large grid for showing working out. A rectangular box is drawn in the bottom right corner of the grid for the answer.


1 mark

20

$7.9 - 0.6 =$

A large grid for showing working out. A rectangular box is drawn in the bottom right corner of the grid for the answer.



1 mark

21

$38 \div 100 =$

A large grid for showing working out. A rectangular box is drawn in the bottom right corner of the grid for the answer.


1 mark


Total for
this page

Answer Sheet: Key Stage 2: Year 4: arithmetic test 5

Guidance:

question	answer	marks
1	312	1
2	539	1
3	972	1
4	432	1
5	528	1
6	19	1
7	$\frac{11}{15}$	1
8	$\frac{2}{4}$ or $\frac{1}{2}$	1
9	5767	1
10	2889	1
11	8030	1
12	5994	1
13	56	1
14	126	1
15	1972	1
16	6314	1
17	$1\frac{1}{2}$	1
18	$\frac{2}{10}$ or $\frac{1}{5}$	1
19	6.1	1
20	7.3	1
21	0.38	1

question	answer	marks
22	9.5	1
23	18	1
24	9.47	1
		Total 24