




Today and Tomorrow we will be completing Arithmetic tests. Try to see how many you can do in 30 mins. After 30 mins have passed, see what number you are on, but still complete the test. The answers are at the end so that you can check what you have done.

Year 4

Mathematics

Arithmetic: Test 3




Name	
Date	









24

total marks



1	$702 + 100 =$	 	 1 mark

2	$479 - 100 =$	 	 1 mark

3	$72 + 200 =$	 	 1 mark


Total for
this page

4

$624 - 30 =$

1 mark

5

$82 \times 3 =$

1 mark

6

$64 \div 4 =$

1 mark

Total for this page

13

$9 \times 5 =$

1 mark

14

$9 \times 2 \times 4 =$

1 mark

15

$352 \times 3 =$

1 mark

Total for
this page

Answer Sheet: Key Stage 2: Year 4: arithmetic test 3

Guidance:

question	answer	marks
1	802	1
2	379	1
3	272	1
4	594	1
5	246	1
6	16	1
7	$\frac{8}{10}$ or $\frac{4}{5}$	1
8	$\frac{4}{15}$	1
9	3267	1
10	6003	1
11	6205	1
12	7578	1
13	45	1
14	72	1
15	1056	1
16	5769	1
17	$1\frac{2}{3}$	1
18	$\frac{6}{8}$ or $\frac{3}{4}$	1
19	3.63	1
20	3	1
21	0.68	1

question	answer	marks
22	9.2	1
23	8	1
24	10.09	1
		Total 24