


Tell the Time: Writing the Time

Write the time shown on each clock.




























Tell the Time: Writing the Time

Answers

Answers can be written in any correct format.



3 o'clock



quarter past 2



quarter to 12



half past 6



5:25



3:55




2:40



11:05



5:14



8:32



9:03



4:28

