
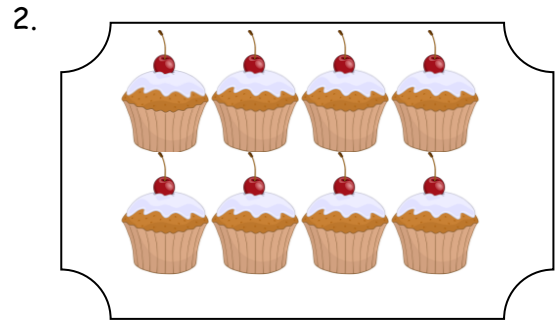


LK: To find fractions of numbers or amounts (c)


Look at these trays of cakes. You buy a fraction of each tray or cakes. Work out how many cakes you buy. To find $\frac{1}{2}$ divide by 2, to find $\frac{1}{4}$ divide by 4, to find $\frac{1}{5}$ divide by 5.




$\frac{1}{2}$ of 14 =




$\frac{1}{4}$ of 8 =




$\frac{1}{5}$ of 10 =



$\frac{1}{5}$ of 15 =



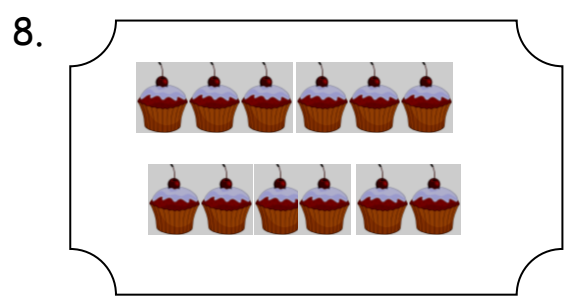
$\frac{1}{3}$ of 9 =



$\frac{1}{5}$ of 20 =



$\frac{1}{3}$ of 18 =



$\frac{1}{4}$ of 12 =



NOW try this:

9. find $\frac{1}{5}$ of 15

10. find $\frac{1}{4}$ of 44 =

11. find $\frac{1}{4}$ of 16

12. find $\frac{1}{5}$ of 65

13. find $\frac{1}{5}$ of 35

14. find $\frac{1}{5}$ of 80

15. find $\frac{1}{3}$ of 18

16. find $\frac{1}{3}$ of 33

17. find $\frac{1}{3}$ of 27

18. find $\frac{1}{10}$ of 20

19. find $\frac{1}{10}$ of 50

20. find $\frac{1}{10}$ of 90

21. find $\frac{2}{10}$ of 20

22. find $\frac{3}{4}$ of 12

23. find $\frac{3}{5}$ of 15

