




Monday Maths Activity

Missing Parts

11		
21	22	
	32	33

25		27
35	36	
	46	




64		
74		76
84	85	



32	33	34
52		54

71	72	
	82	
		93

57	58	
67		69
		79



78		
	89	

	39	

		77

Mystery numbers (2)

I'm thinking of a number between 1 and 20.

It is bigger than 15

It has a 7 in it.

My number is

I'm thinking of a number between 1 and 50.

It has a 4 in the tens column.

It is odd.

It is smaller than 43.

My number is

I'm thinking of a number between 1 and 30.

It is even.

The tens digit and the units digits are the same.

My number is

I'm thinking of a number between 1 and 50.

If I count up in 5s, I say this number.

It is odd.

It is bigger than 25 and smaller than 40.

My number is

Now think of clues for your own mystery number.