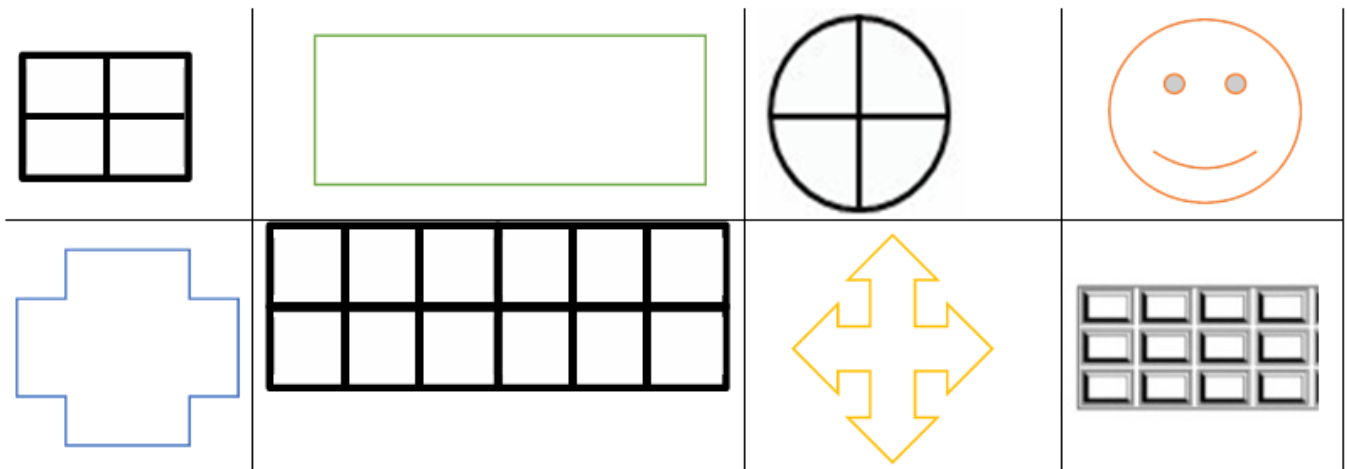

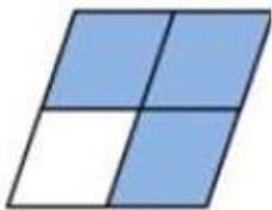


# Fractions- quarter

Shade  $\frac{1}{4}$  of these shapes.



Tick the shape that shows one quarter shaded.



What is  $\frac{1}{4}$  of these numbers?

$\frac{1}{4}$ of 24 =	$\frac{1}{4}$ of 28 =
$\frac{1}{4}$ of 44 =	$\frac{1}{4}$ of 16 =
$\frac{1}{4}$ of 36 =	$\frac{1}{4}$ of 40 =
$\frac{1}{4}$ of 8 =	$\frac{1}{4}$ of 44 =
$\frac{1}{4}$ of 32 =	$\frac{1}{4}$ of 12 =

Solve these problems.

4. Emma has 20 muffins.



Find  $\frac{1}{4}$  of muffins? .....

5. I think of a number. A quarter of that number is 8? .....

6. Here are some hearts. Can you calculate quarter of them?

