

Addition to 100

Add together these two digit numbers AND match with the correct Answer.

$9 + 91$

94

$25 + 37$

88

$37 + 58$

77

$46 + 28$

62

$62 + 15$

95

$74 + 16$

91

$5 + 89$

80

$50 + 41$

74

$59 + 21$

100


$66 + 22$

90

Sarah has 7 boxes of crayons. Each box has 10 crayons. How many crayons does Sarah have?



Ben has a crate of 20 apples, a crate of 30 oranges and a crate of 25 pears. How many fruits does Ben have in total?



How many legs do 9 spiders have?



5p



23p

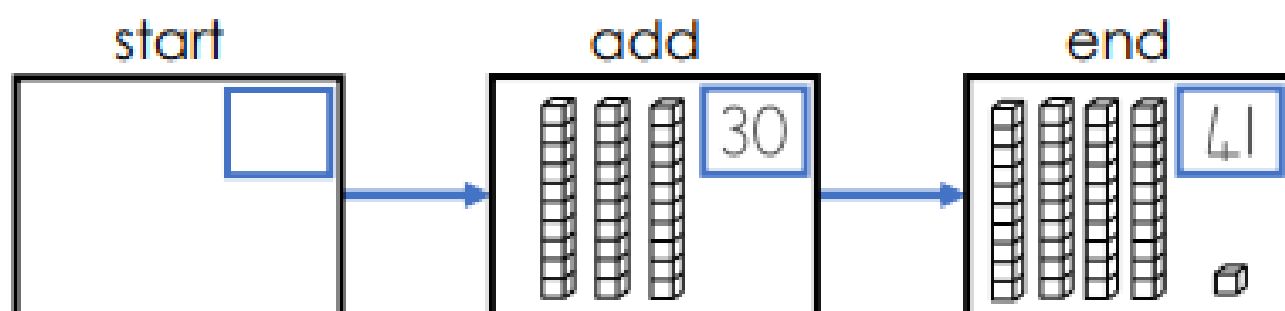
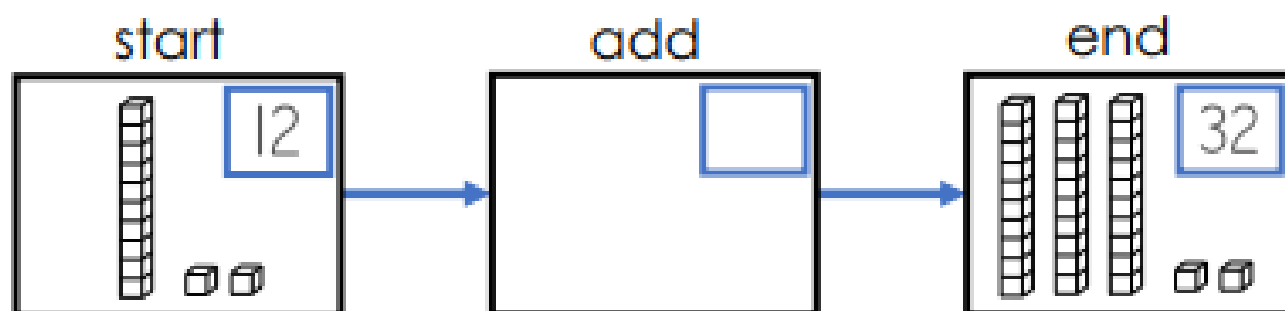
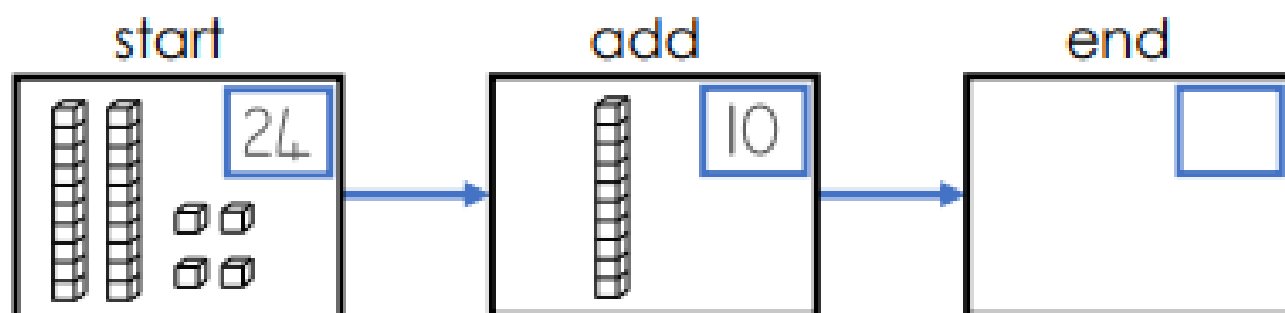


69p



Sam went to watch a movie. He bought a popcorn box, a juice box and a cinema ticket. How much did he spend altogether?

Fill the gaps



Which answer?

$$88 + \boxed{} = 100$$

12

22