




Times Table Hunt: 2x, 3x, 5x and 10x Table


Detective Dog is on the hunt for some missing numbers from the 2x, 3x, 5x and 10x tables. Can you help him find them?


1. $2 \times 3 =$ 


3. $16 = 8 \times$ 


8. $8 \times$  $= 80$


2. $7 \times$  $= 35$


4. $4 \times 5 =$ 


9.  $= 7 \times 5$


5. $3 \times 10 =$ 

10. $36 =$  $\times 3$

6.  $= 11 \times 5$

11.  $\times 2 = 18$


7. $7 \times 3 =$ 


12. $0 \times 5 =$ 




Times Table Hunt: 2x, 3x, 5x and 10x Table


Detective Dog is on the hunt for some missing numbers from the 2x, 3x, 5x and 10x tables. Can you help him find them?


13. $12 \times 5 =$ 


15. $12 =$  $\times 3$


20. $8 \times$  $= 40$


14. $7 \times$  $= 70$


16. $11 \times 10 =$ 


21. $7 \times$  $= 14$

17. $5 \times 3 =$ 

22. $18 =$  $\times 3$

18. $30 =$  $\times 3$

23. $45 =$  $\times 5$

19. $10 \times 2 =$ 

24. $8 \times 2 =$ 