

For any support please email:
WDV.YEAR1@Oasiswoodview.org



1. Match each image to a calculation and complete by counting on.

A.  + 

D. $13 + 5 =$

B.  + 

E. $12 + 4 =$

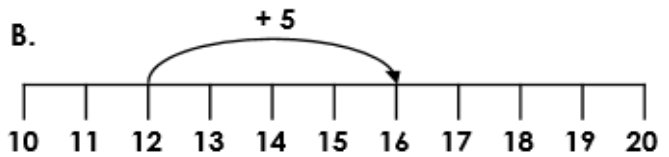
C.  + 

F. $11 + 6 =$

2. Which representation is incorrect?

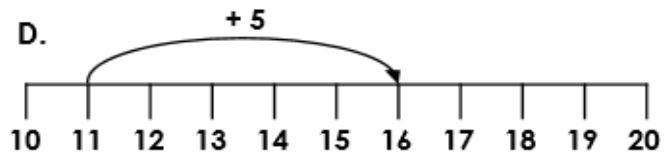
A.

18	
11	7



C.

17	
14	3



3. Beth and Sam are playing a board game. Use the number line to work out who is in the lead. Explain your answer.



I was on 9.
I have rolled a 5.



I was on 7.
I have rolled a 6.

