



Week 8 - Home learning




Year 1 Maths




Wednesday - Compare objects within 50

For any support please email: WDV.YEAR1@Oasiswoodview.org



1. Use the symbols $>$, $<$ and $=$ to make each statement correct.

A.   thirty-six



B.   

C.   

2. Complete the statements to compare the groups of objects.

 Willow 


A. Willow has . Theo has .

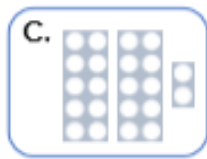


 Theo 

B. is more than .

C. has the most.

3. Use the cards below to complete the statement.

A.  B. twenty-seven

C.  D.  E. 

Find 3 possibilities.

1. _____ $>$ _____

2. _____ $>$ _____

3. _____ $>$ _____