

Week 8 - Home learning

Year 1 Maths


Tuesday - Tens and ones

For any support please email: WDV.YEAR1@Oasiswoodview.org

1. Match the representations that show the same number.




1.




3.

2. Complete the sentences and draw Base 10 to represent each number.

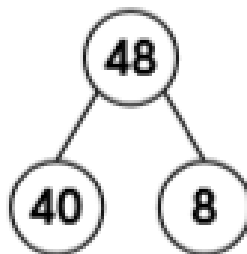
A. $16 = \square$ ten and \square ones



B. $42 = \square$ tens and \square ones



3. Ed has been representing the number 48 in three different ways.



Is he correct? Explain your answer.