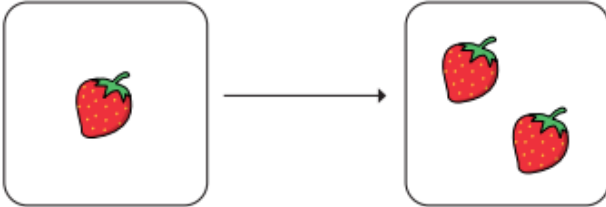
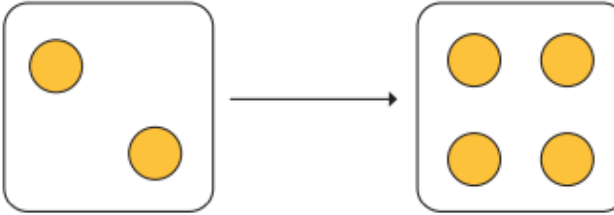


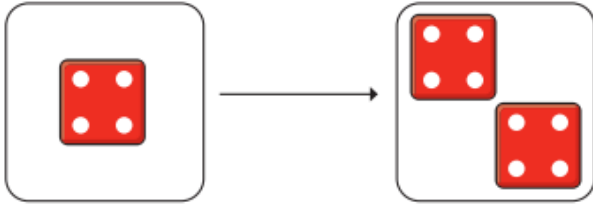
Home Learning: Week 6 - Lesson 1 Exploring doubles

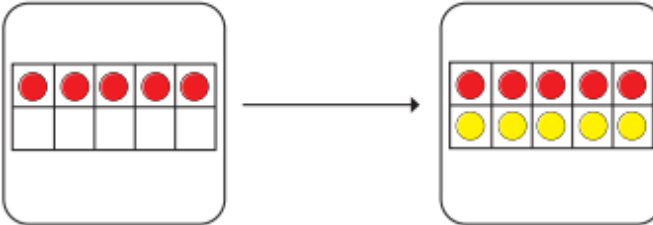
**I** Complete the sentences.

Use the pictures to help you.

a)   
Double 1 is

b)   
Double 2 is

c)   
Double  is

d)   
Double  is

Challenges:

**2** Match the doubles to the additions.

Double 3

$6 + 6$

Double 6

$7 + 7$

Double 10

$3 + 3$

Double 7

$10 + 10$

**3** Fill in the gaps.

a) Double 15 is

b) Double 11 is