







Home Learning: Week 5 - Lesson 1 Exploring calculation strategies within 10

Complete the missing information. Use counters or other practical resources around your home to help you.

1.

Use the pattern to complete the number sentences

	$0 + 5 = 5$
	$1 + \square = 5$
	$2 + \square = 5$
	$3 + \square = 5$
	$4 + \square = 5$
	$5 + \square = 5$

2.

Can you see these number sentences in the picture below?

$$3 + 2 = 5$$

$$2 + 3 = 5$$

$$5 - 3 = 2$$

$$5 - 2 = 3$$



Now write the four number sentences for the picture below:

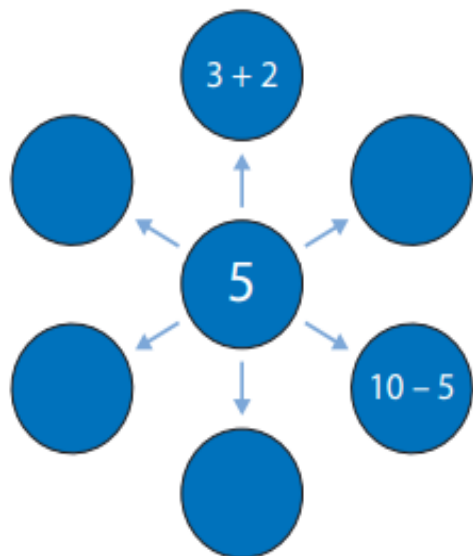


Challenges:

3.

If you know one fact, what other facts do you know?

Complete:



4.

Complete and write the number sentences using this model.

