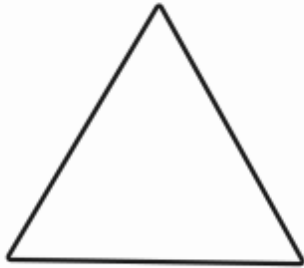


Home Learning: Week 4- Lesson 2 on Shapes (Please look at the 2D shape mat on page 2)

Can you name the shapes and talk about their properties?

Name the 2D Shape



Number of sides _____

Name _____




Number of sides _____

Name _____



Number of sides _____

Name _____



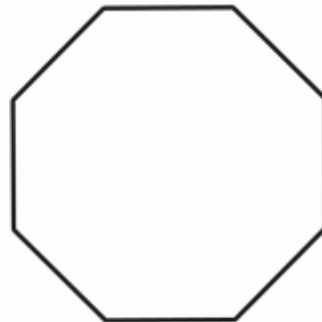
Number of sides _____

Name _____



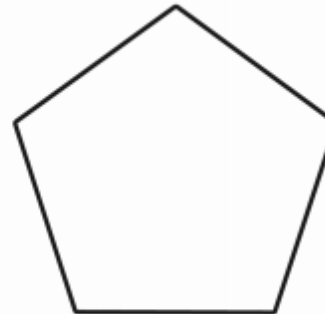
Number of sides _____

Name _____



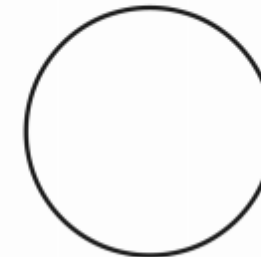
Number of sides _____

Name _____



Number of sides _____











Name _____



Number of sides _____

Name _____

2D Shapes

Name		Sides	Vertices
triangle		3	3
circle		1	0
square		4	4
rectangle		4	4
pentagon		5	5
hexagon		6	6
oval		1	0
rhombus		4	4
trapezium		4	4
parallelogram		4	4