

Week 12 - Home learning









Friday

For any support please email: WDV.YEAR1@Oasiswoodview.org




Consolidating recognising and values of coins and notes

Money Knowledge Organiser





UK Coins

							
1p one penny coin	2p two pence coin	5p five pence coin	10p ten pence coin	20p twenty pence coin	50p fifty pence coin	£1 one pound coin	£2 two pound coin

UK Notes

		
£5 5 pound	£10 10 pound	£20 20 pound

Counting in Coins


 = 5p	 = 4p	 = 15p	 = 20p
--	--	--	---

Reasoning and Problem Solving – Money Consolidation – Year 1

This is Abigail.



This is Elijah.



This is Jemima.



They all work in a bank. Customers come into the bank. They pay in or take out money from their bank accounts. Abigail, Elijah and Jemima have to check the money. They do this by recognising and counting coins and notes. Today, they need your help.

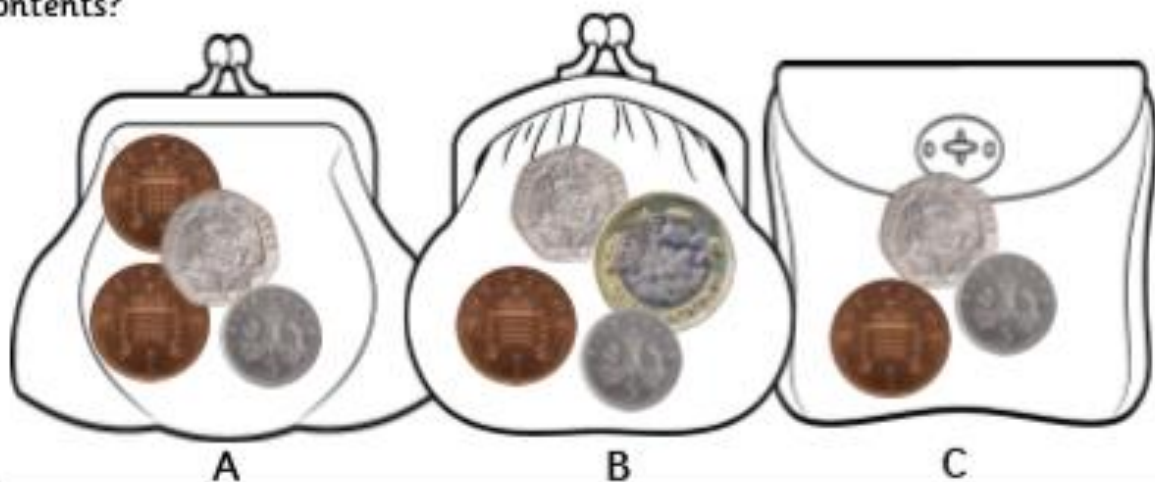
1. Jemima says:

Coins with straight edges are worth more than coins with round edges.



Is Jemima right? Explain your answer.

2. Three purses are handed into the bank. What is different about their contents?



3. A shopkeeper comes into the bank. He needs to change a £1 coin. The bank only has 50ps and 10ps left. Which coins could the bank give the shopkeeper?




=

4. Elijah is sorting through the envelopes of money that have come into the bank. Which is the odd one out?



A



B



C