

Week 12 - Home learning

Year 1 Maths - Money

Wednesday

For any support please email: WDV.YEAR1@Oasiswoodview.org

Recognising Coins

For today's lesson you will be using your knowledge of coins to add up values. Remember you add these values up just like you would with an addition equation.

Starter:

Recognising Coins

1a. What is the value of each coin?



VF

Recognising Coins

1b. What is the value of each coin?



VF

2a. Circle the coins that total 4p.



VF

2b. Circle the coins that total 20p.



VF

3a. Circle the coin with the least value.



VF

3b. Circle the coin with the most value.





















VF

Task:

Recognising Coins

Recognising Coins

<p>6a. What is the value of each set?</p> <p>a. </p> <p>b. </p> <p> VF</p>	<p>6b. What is the value of each set?</p> <p>a. </p> <p>b. </p> <p> VF</p>
<p>7a. Circle the coins that total 22p.</p> <p></p> <p> VF</p>	<p>7b. Circle the coins that total £3.</p> <p></p> <p> VF</p>
<p>8a. Circle the set of coins with the least value.</p> <p></p> <p></p> <p></p> <p> VF</p>	<p>8b. Circle the set of coins with the most value.</p> <p></p> <p></p> <p></p> <p> VF</p>

Problem solving and reasoning

Recognising Coins

1a. Sam has two coins in his pocket. They total 4p.

His friend Kate says,






Is she correct? Explain your answer.



R

2a. Complete the table.

Coin	Value	Number of sides	Colour
	2p	1	
			
		12	silver and gold