

Week 12 - Home learning

Tuesday

For any support please email: WDV.YEAR1@Oasiswoodview.org









Value of Coins

For today's lesson you will be using your knowledge of numbers to understand the value of each coin.

A 1pence coin has the value of 1. 20 1pence coins would have the same value as a 20pence coin.

A 5pence coin has the value of 5. 4 5pence coins would have the same value as a 20pence coin.

Can you complete the table below:

Coin	1p	2p	5p	10p
	1	X	X	X
		1	X	X
			1	X
				1
	20		4	
				
				
		100	40	