

Week 11 - Home learning









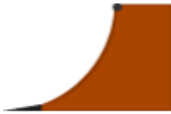
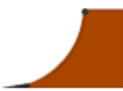
Year 1 Maths - Problem Solving and Reasoning

Friday

For any support please email: WDV.YEAR1@Oasiswoodview.org

Answer the following questions in full sentences.

2. Match the words to the right ramps or rails in each set.

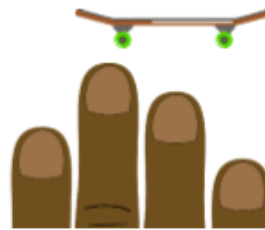
Longest					
Shortest					
Long					
Shorter					
Short					
Shortest					
Tallest					
Short					
Taller					
Tall					

4. Check the friends' measurements. Explain any mistakes.




Akil

The finger board is 4 fingers long.



Jaali

The rail is 12 pencils long.



Naomi

The coffee table is 5 hands tall.

