

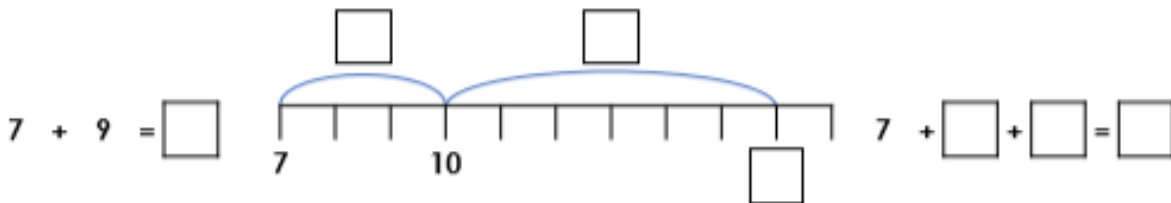
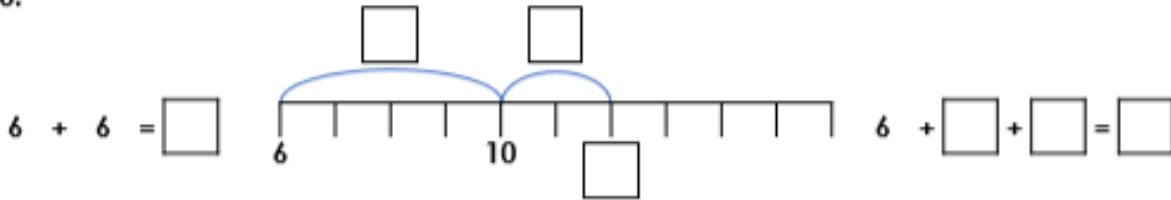
Week 10 - Home learning

Year 1 Maths - Add by making 10

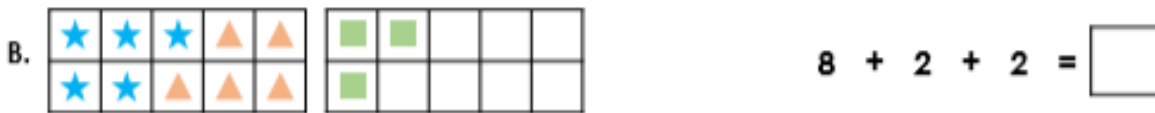
Monday

For any support please email: WDV.YEAR1@Oasiswoodview.org

1. Complete the number lines and calculations to show how you can add by making 10.



2. Match the ten frames to the correct calculations and complete the answers.

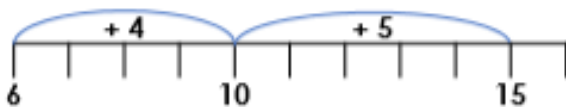


3. Jordan and Sally are solving the calculation $6 + 9$. They must add by making 10.



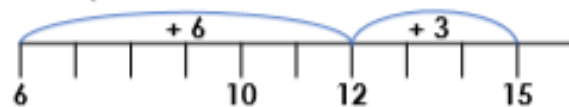
I partitioned 9 in to 4 and 5.
So I calculated $6 + 4 + 5 = 15$.

Jordan



I partitioned 9 in to 6 and 3.
So I calculated $6 + 6 + 3 = 15$.

Sally



Who is correct? Explain why.